

Name: _____ # _____

Geometry: Period _____

Ms. Pierre

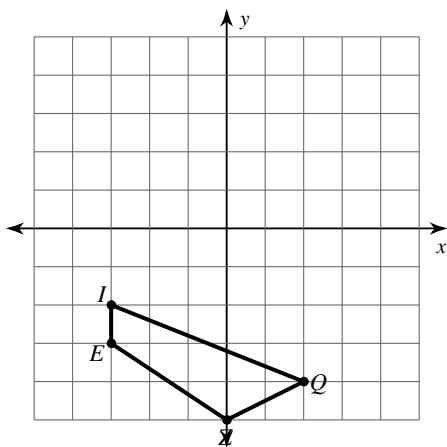
Date: _____



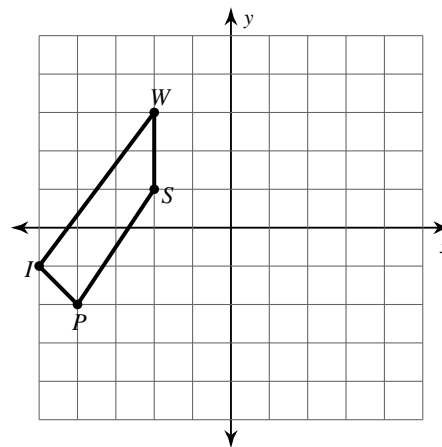
Do Now #6

Graph the image of the figure using the transformation given.

1. Reflection across $y = -2$



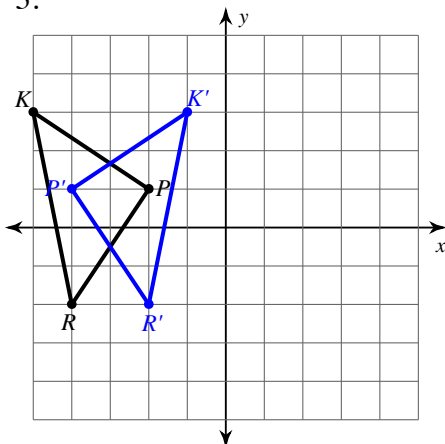
2. Reflection across $x = -1$



Enrichment: Complete the next 2 questions if you're finished and still have time left

Write a rule to describe each transformation.

3.



4.

