

Name: _____ # _____

Geometry: Period _____

Ms. Pierre

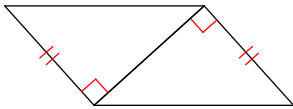
Date: _____



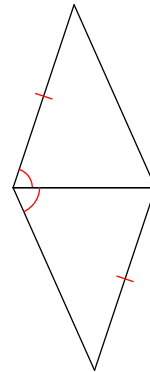
Do Now #14

State if the two triangles are congruent. If they are, state how you know.

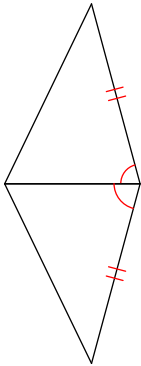
1.



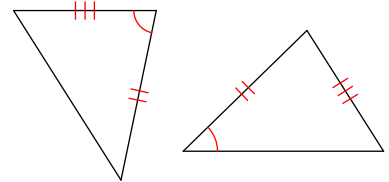
2.



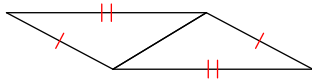
3.



4.



5.



6.

