

Name: \_\_\_\_\_ # \_\_\_\_\_

Geometry: Period \_\_\_\_\_

Ms. Pierre

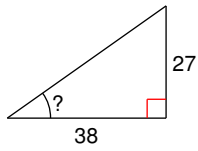
Date: \_\_\_\_\_



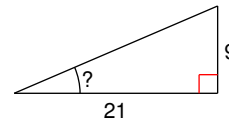
### Do Now #27

Find the measure of the indicated angle to the nearest degree.

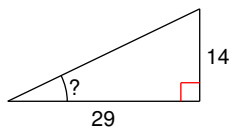
1)



2)



3)



4)

