

Name: \_\_\_\_\_ # \_\_\_\_\_

Geometry: Period \_\_\_\_\_

Ms. Pierre

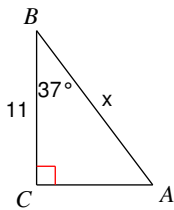
Date: \_\_\_\_\_



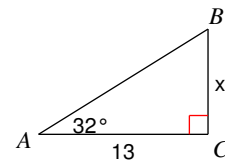
### Do Now #26

Find the measure of each side indicated. Round your answer to the nearest tenth.

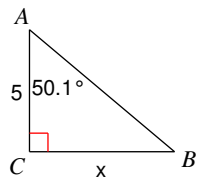
1)



2)



3)



4)

