

Name: _____ # _____

Geometry: Period _____

Ms. Pierre

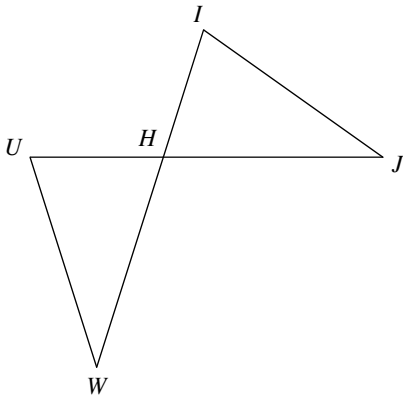
Date: _____



Do Now #13

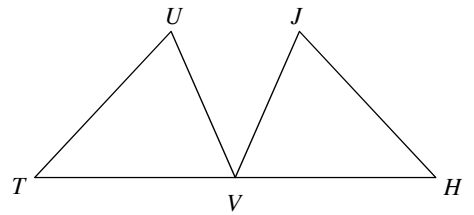
Complete each congruence statement by naming the corresponding angle or side.

1. $\triangle HIJ \cong \triangle HUW$



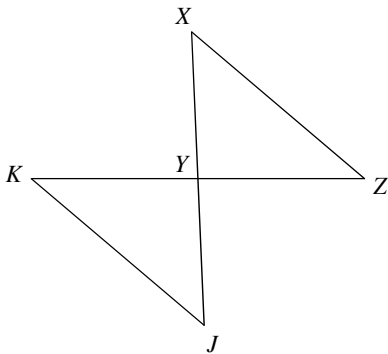
$\overline{IJ} \cong ?$

2. $\triangle TUV \cong \triangle HVJ$



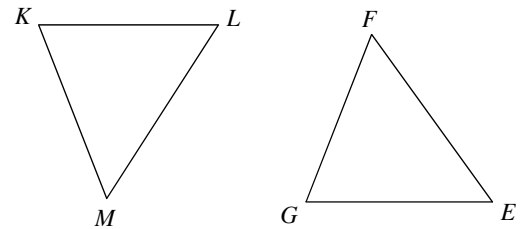
$\overline{UV} \cong ?$

3. $\triangle YXZ \cong \triangle YJK$



$\angle ZYX \cong ?$

4. $\triangle KLM \cong \triangle GFE$



$\angle K \cong ?$