

Name: _____ # _____

Geometry: Period _____

Ms. Pierre

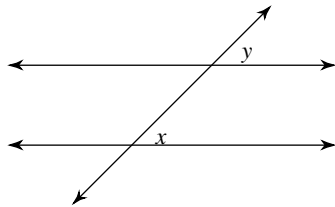
Date: _____



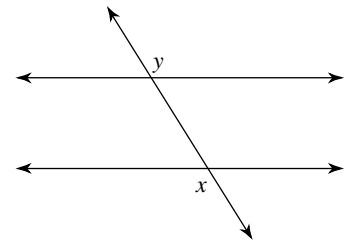
Do Now #12

Identify each pair of angles as **corresponding**, **alternate interior**, **alternate exterior**, or **consecutive interior**.

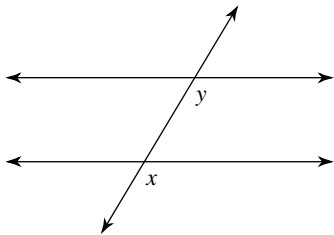
1.)



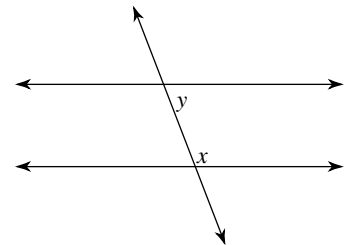
2.)



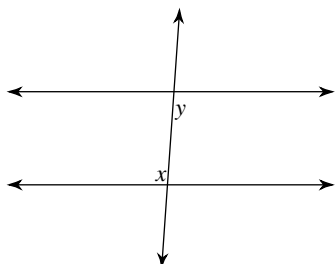
3.)



4.)



5.)



6.)

