

Name: _____ # _____

Geometry: Period _____

Ms. Pierre

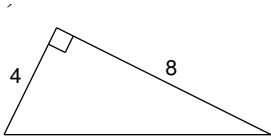
Date: _____



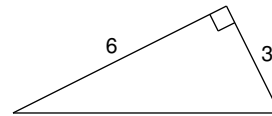
Do Now #25

Use the Pythagorean Theorem to find the missing side of the right triangle. Round your answer to the nearest tenth.

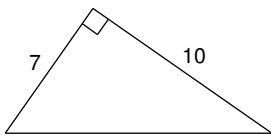
1)



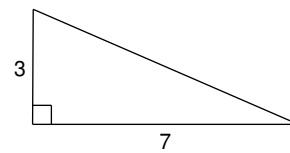
2)



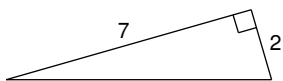
3)



4)



5)



6)

