

Name: \_\_\_\_\_ # \_\_\_\_\_

Geometry: Period \_\_\_\_\_

Ms. Pierre

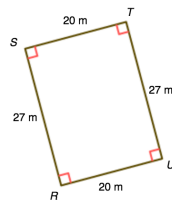
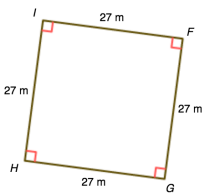
Date: \_\_\_\_\_



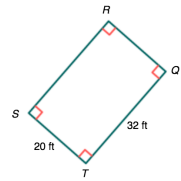
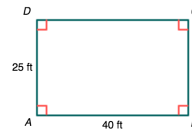
### Do Now #24

Are these shapes similar? Justify by showing your working.

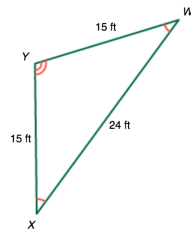
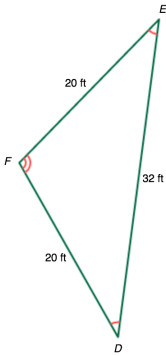
1)



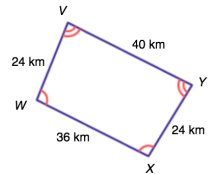
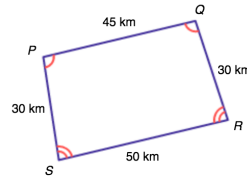
2)



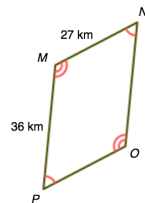
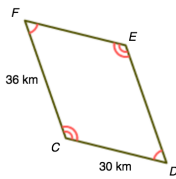
3)



4)



5)



6)

